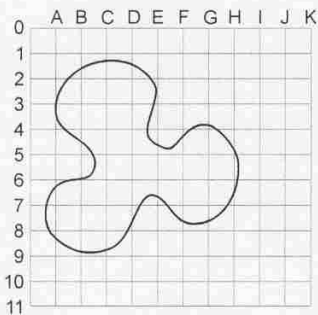
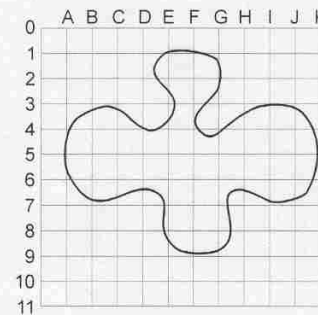
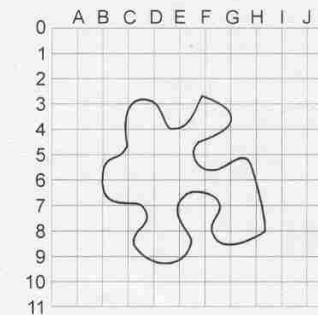
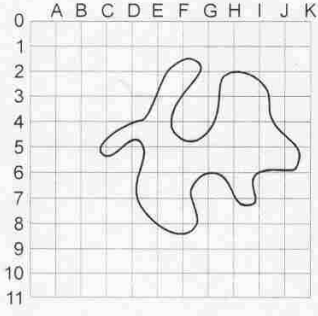
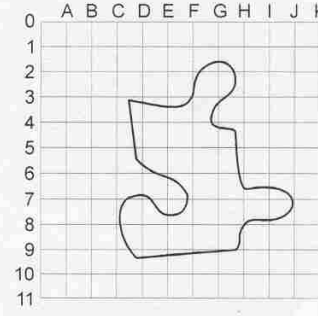
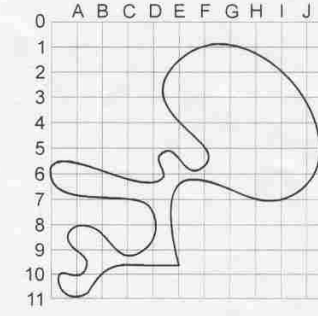
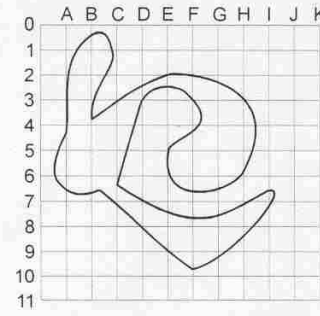
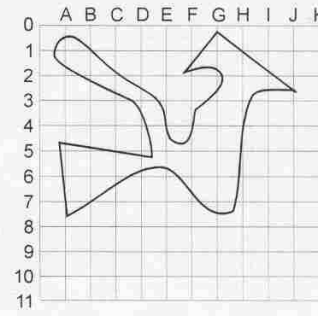


Τεστ Ικανότητας

Αντίληψη του χώρου και των σχημάτων
Άσκηση 12

Απαιτούμενος χρόνος: 5 λεπτά

Προσδιόρισε τις συντεταγμένες του κέντρου βάρους των παρακάτω σχημάτων.

 <p>1. _____</p>	 <p>2. _____</p>	 <p>3. _____</p>
 <p>4. _____</p>	 <p>5. _____</p>	 <p>6. _____</p>
 <p>7. _____</p>	 <p>8. _____</p>	