

Тест за проверка на способностите

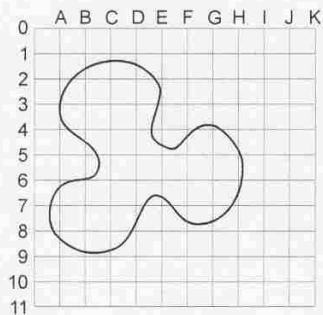
разработен от

ibw
Institut für Bildungsforschung der Wirtschaft

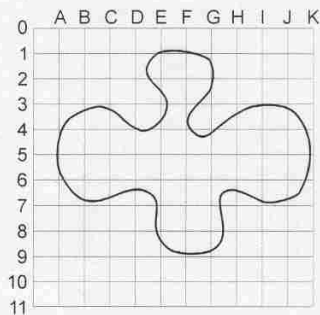
Чувство за форма и пространство
Задача 12

Време: 5 минути

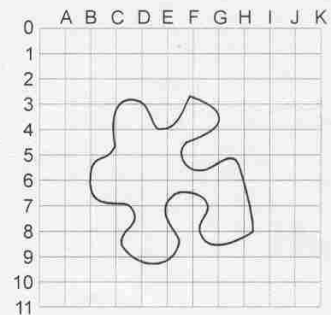
Кои са координатите на центъра на всяка една от посочените фигури?



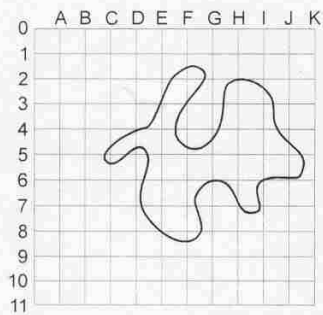
1. _____



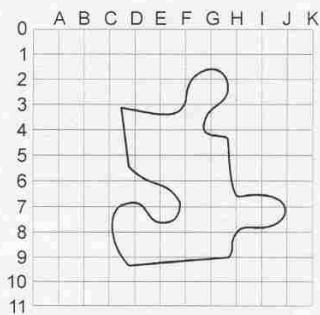
2. _____



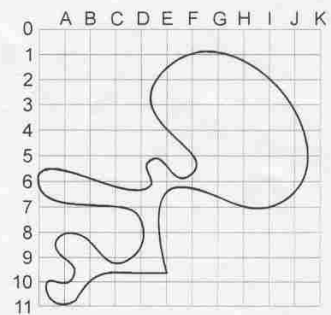
3. _____



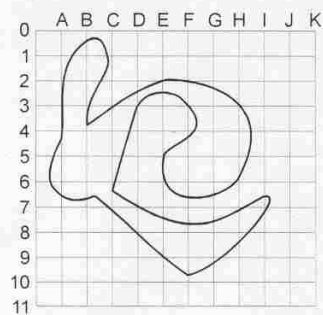
4. _____



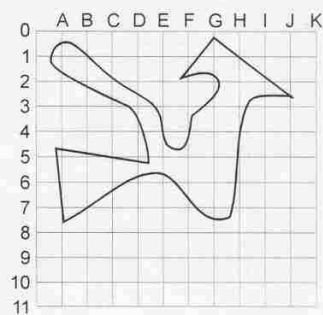
5. _____



6. _____



7. _____



8. _____

Тест за
проверка на способностите